













# Coin Combo Challenge

Activity "rules"

- In columns 3, 4, and 5, write the number (#) and value (\$) of coins whose sum matches column 1.
- Write coin amounts only in unshaded boxes.
- In each column, use the *fewest* coins possible.
- It is not necessary to write in each unshaded box.

Cut out the strips. There are nine strips.













<h1>\$.21</h1>		#	#	#
		\$	\$	\$
		#		
		\$		
			#	
			\$	
		#	#	#
		\$	\$	\$
<h1>\$.35</h1>		#		#
		\$		\$
		#	#	
		\$	\$	
			#	#
			\$	\$
		#	#	#
		\$	\$	\$
<h1>\$.15</h1>		#	#	#
		\$	\$	\$
		#		#
		\$		\$
			#	#
			\$	\$
		#	#	
		\$	\$	

# Coin Combo Challenge

Activity "rules"

- In columns 3, 4, and 5, write the number (#) and value (\$) of coins whose sum matches column 1.
- Write coin amounts only in unshaded boxes.
- In each column, use the *fewest* coins possible.
- It is not necessary to write in each unshaded box.

Cut out the strips. There are nine strips.













<h1>\$.75</h1>			#	#
			\$	\$
		#		
		\$		
		#		#
		\$		\$
			#	#
			\$	\$
<h1>\$.56</h1>			#	
			\$	
		#		#
		\$		\$
			#	#
		\$		\$
		#	#	#
		\$	\$	\$
<h1>\$.69</h1>			#	#
			\$	\$
		#		#
		\$		\$
			#	
		\$		
		#	#	#
		\$	\$	\$













# Coin Combo Challenge





Activity "rules"





- In columns 3, 4, and 5, write the number (#) and value (\$) of coins whose sum matches column 1.
- Write coin amounts only in unshaded boxes.
- In each column, use the *fewest* coins possible.
- It is not necessary to write in each unshaded box.





Cut out the strips. There are nine strips.





<h1>\$.74</h1>			# ----- \$	# ----- \$
		# ----- \$		# ----- \$
		# ----- \$	# ----- \$	
		# ----- \$	# ----- \$	# ----- \$
<h1>\$.98</h1>		# ----- \$		# ----- \$
		# ----- \$	# ----- \$	
				
		# ----- \$	# ----- \$	# ----- \$
<h1>\$.49</h1>		# ----- \$		
		# ----- \$	# ----- \$	
				# ----- \$
		# ----- \$	# ----- \$	# ----- \$





<h1>\$.21</h1>		# \$	# \$	# \$
		# 2 \$ \$.20		
			# 4 \$ \$.20	
		# 1 \$ \$.01	# 1 \$ \$.01	# 21 \$ \$.21
<h1>\$.35</h1>		# 1 \$ \$.25		# 1 \$ \$.25
		# 1 \$ \$.10	# 3 \$ \$.30	
			# 1 \$ \$.05	# 2 \$ \$.10
		# \$	# \$	# \$
<h1>\$.15</h1>		# \$	# \$	# \$
		# 1 \$ \$.10		# 1 \$ \$.10
			# 3 \$ \$.15	# 1 \$ \$.05
		# 5 \$ \$.05	# \$	





<b>\$.75</b>			# 3 \$ .75	# 2 \$ .50
		# 7 \$ .70		
		# 1 \$ .05		# 5 \$ .25
			# \$	# \$

<b>\$.56</b>			# 2 \$ .50	
		# 5 \$ .50		# 5 \$ .50
			# 1 \$ .05	# 1 \$ .05
		# 6 \$ .06	# 1 \$ .01	# 1 \$ .01

<b>\$.69</b>			# 2 \$ .50	# 2 \$ .50
		# 6 \$ .60		# 1 \$ .10
			# 3 \$ .15	
		# 9 \$ .09	# 4 \$ .04	# 9 \$ .09

<b>\$.74</b>			# 2 \$ .50	# 2 \$ .50
		# 7 \$ .70		# 2 \$ .20
		# \$	# 4 \$ .20	
		# 4 \$ .04	# 4 \$ .04	# 4 \$ .04

<b>\$.98</b>		# 3 \$ .75		# 3 \$ .75
		# 2 \$ .20	# 9 \$ .90	
				
		# 3 \$ .03	# 8 \$ .08	# 23 \$ .23

<b>\$.49</b>		# 1 \$ .25		
		# 2 \$ .20	# 4 \$ .40	
				# 8 \$ .40
		# 4 \$ .04	# 9 \$ .09	# 9 \$ .09